






Fallen Leaves Pictograph

Monday	
Tuesday	
Wednesday	
Thursday	
Friday	

Each leaf is worth five leaves.

 = 5

1. How many leaves fell on each day of the week?

Monday	
Tuesday	
Wednesday	
Thursday	
Friday	

2. How many leaves fell on Thursday altogether?

3. How many more leaves fell on Tuesday than Wednesday?

4. Which two days had the same number of leaves fall?