


Name :

Class :

# WHICH ONE IS TALLER?

Tick the taller animal and cross out the smaller object in each circle below the pictures.

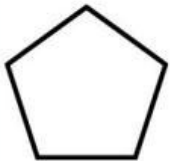


☐☐☐☐☐☐☐☐☐☐☐☐



Name.....Class.....No. ....

# 2D SHAPES

Draw a line to connect the shape with its name.



- rectangle
- hexagon
- pentagon
- circle
- triangle
- oval
- octagon
- square