

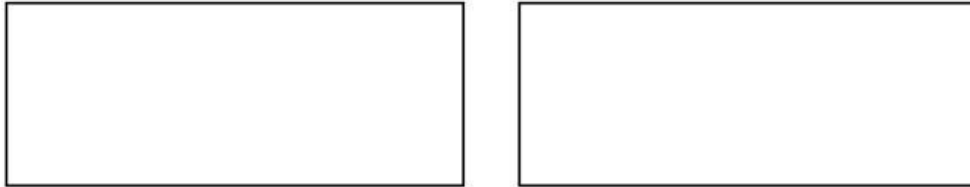
Name: _____

Date: _____

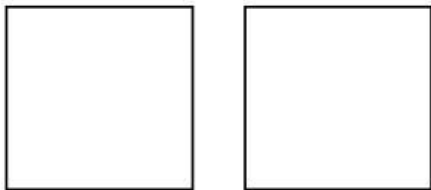
EXTENDED PRACTICE

PARTITION SHAPES INTO EQUAL SHARES


1. Draw lines to make **4** equal pieces in two different ways.



2. Draw lines to make **2** equal pieces in two different ways.



3. Luis has a paper circle. Show how to split the paper into halves.



4. Ved has a chocolate bar in the shape of a rectangle. Show how to split the chocolate bar into thirds.

