 ICM INSAN CENDEKIA MADANI	Name	:		
	Class	:	Marks	Grading
	Teacher	:		
	Date	:		

Addition within 20

1. Add using a number line to help you.




a. $11 + 4 =$

b. $17 + 3 =$


2. Add by making 10.

a. $6 + 5 = 10 +$



$=$

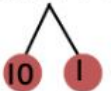
b. $4 + 8 =$



$=$

3. Add the ones first.

a. $11 + 6$

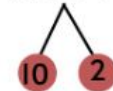


$1 + 6 =$

$10 + =$

$11 + 6 =$

b. $12 + 7$



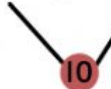
$2 + =$

$10 + =$

$12 + 7 =$

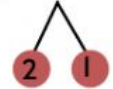
4. Add by making 10.

a. $6 + 5 + 4$



$10 + =$

b. $8 + 3 + 6$



$10 + =$

How did you do your worksheet?

(write A, B, or C)



A. I did the worksheet by myself



B. I did with a little help



C. I did with a lot of help