


Topic 7, Lesson 2

1. Drag and drop the name of the part of the flower to the correct picture.






Pistil

Stamen

Petal

Sepal



2. Match

a. The male part of the flower that makes pollen.

pollen

b. The male reproductive cell

stamen

c. The part that has a variety of colors, patterns, shapes, and odors that attracts pollinators.

cuticle

d. The part that protects the budding flower by wrapping around it.

petal

e. The waxy outer covering helps prevent a plant from losing too much water.

sepal

f. The female part of the flower that helps The plant reproduces.

ovary

YOU DID IT!
CONGRATULATIONS!

PREPARED BY: Tr. Hadeel Assi