







Name: _____

Adding money

Add the prices of the items, and write the total amount.

- 1)  \$9.30 +  \$7.36 = _____
- 2)  \$8.67 +  \$2.52 = _____
- 3)  \$7.18 +  \$24.71 = _____

Read each word problem and solve. Use **C.U.B.E.S** to help you.

1. I bought a lollipop for \$1.78. I gave the chashier \$2.00.
How much change did I get? _____
2. Mom went to the shop. She bought 2 chips for \$0.70 each.
She used \$5.00 to pay for them.
 - a. How much do the two chips cost? _____
 - b. What was Mom's change from \$5.00? _____
3. Sarah loves to eat burgers. She went to McDonald's and bought burger for \$5.23.
How much change did Sarah get if she paid with \$20.00?