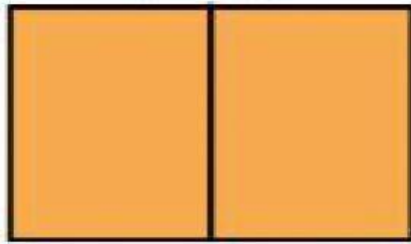


A

Is the rectangle
partitioned
equally?

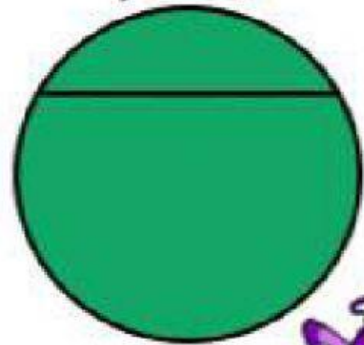


©Meredith Gilbert 2016
Sunshine, Sand and Scissors



B

Is the circle
partitioned
equally?




©Meredith Gilbert 2016
Sunshine, Sand and Scissors



C

How is the
rectangle
partitioned?




©Meredith Gilbert 2016
Sunshine, Sand and Scissors



D

How is the circle
partitioned?



©Meredith Gilbert 2016
Sunshine, Sand and Scissors

