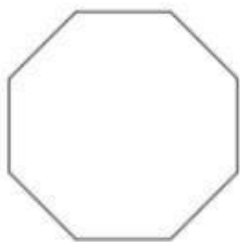
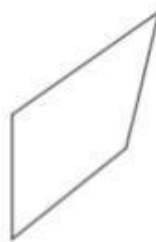


State if each polygon is regular or not. Type **REG** for Regular and **IRREG** for Irregular in the space next to each figure.

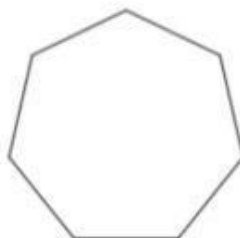
1)




2)



3)




4)

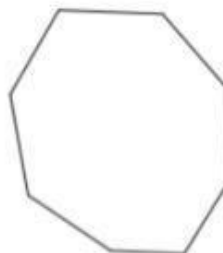


State if each polygon is concave or convex. Type **CV** for Concave and **CX** for Convex


5)



6)



7)



8)

