
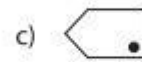
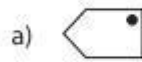





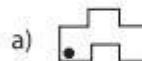




Multiple Choice

Sheet 1

Choose the correct image which shows the transformation of each figure.

1) Reflection of  ?2) Translation of  ?3) Rotation of  ?4) Reflection of  ?5) Translation of  ?6) Rotation of  ?7) Reflection of  ?8) Translation of  ?