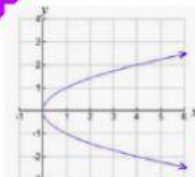
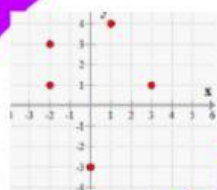
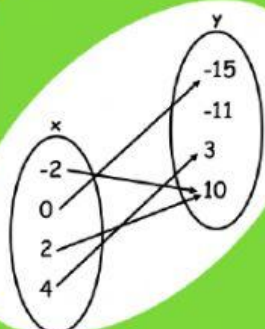


Relations and Function Practice

Determine if each relation is a function. Explain why or why not

Study Time (minutes)	Exam Score Percent
30	65
60	80
90	97
60	74

Input	Output
-10	15
-5	15
0	15
5	15



Relations and Function Practice

Determine if each relation is a function. Explain why or why not

x	$f(x)$
-3	$\frac{2}{5}$
$\frac{3}{2}$	$\frac{3}{5}$
-3	$\frac{3}{2}$
5	4

Week	Account Balance
0	100
1	200
2	400
3	800

