



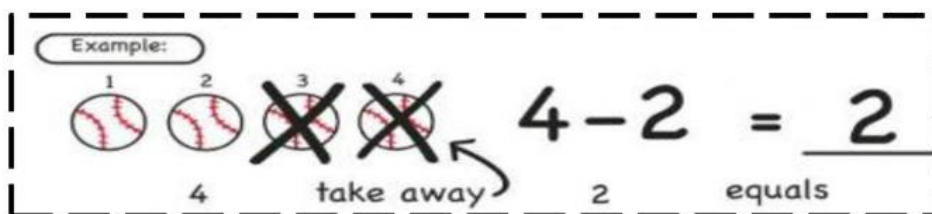
Campbell Academy Foundation Inc.
Lower Calajuan, Minglanilla Cebu

Numeracy weekly test for K1

Lesson 16 - Subtraction

Prepared by: Ms. Love

I. Count the pictures and drag the cross mark to the number of objects that you take away, then write the answer in the box.



$$5 - 3 = \underline{\quad}$$



$$8 - 5 = \underline{\quad}$$



$$4 - 1 = \underline{\quad}$$



$$7 - 2 = \underline{\quad}$$



$$9 - 4 = \underline{\quad}$$



6.



$$2 - 2 = \underline{\quad}$$

7.




$$4 - 3 = \underline{\quad}$$

8.




$$5 - 1 = \underline{\quad}$$

9.



$$10 - 3 = \underline{\quad}$$

10.



$$9 - 7 = \underline{\quad}$$



II. Write the number of objects that were taken away and write the number of objects left in the box to complete the subtraction sentence.



$$4 - \underline{\quad} = \underline{\quad}$$



$$5 - \underline{\quad} = \underline{\quad}$$



$$8 - \underline{\quad} = \underline{\quad}$$



$$4 - \underline{\quad} = \underline{\quad}$$



$$5 - \underline{\quad} = \underline{\quad}$$