



Cambridge Primary Programme CAMBRIDGE PRIMARY MATHEMATICS 1

6.1. POSITION

Name: _____ Date: _____ Class: _____

Part 1. Write number sentences for these stories.

Draw a ball next to the boy.

Draw a spider under the table.

Draw a cloud above the tree.

Draw a cat beside the fence.


Draw a girl under the umbrella.



Ball



Spider




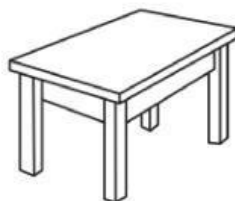
Cloud



Cat



Girl




Part 2. Choose the correct picture.

(a) Choose the fourth snail to the right.



(b) Choose the elephant to the left of the third elephant.



(c) Choose the third cat



(d) Choose the sixth car.



Part 3. Write the ordinal number of the shaded object.

										7th

Part 4. Write the missing ordinal numbers.



1st _____ 6th _____

Part 5. Draw lines to match the ordinal numbers with the ordinal number word.

1st

seventh

3rd

first

5th

tenth

7th

third

10th

fifth