



Name: \_\_\_\_\_

Date: \_\_\_\_\_

Class: \_\_\_\_\_

Part 1. Draw lines to match the ordinal number with the ordinal number word.

1<sup>st</sup>

fourth

2<sup>nd</sup>

eighth

3<sup>rd</sup>

second

4<sup>th</sup>

tenth

5<sup>th</sup>

first

6<sup>th</sup>

third

7<sup>th</sup>

ninth

8<sup>th</sup>

fifth

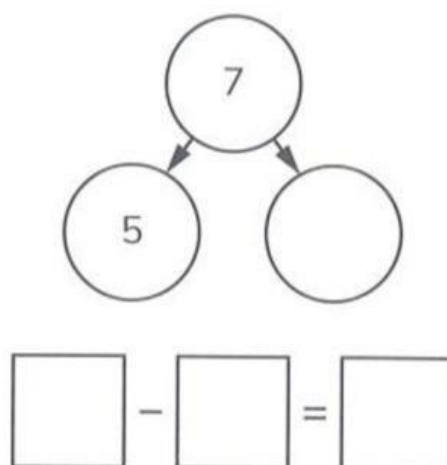
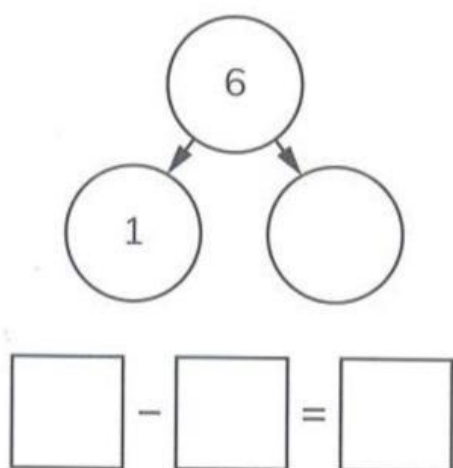
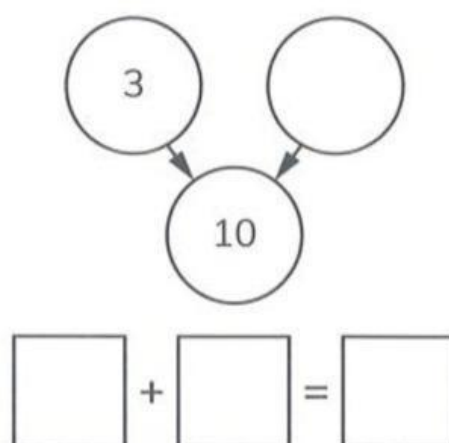
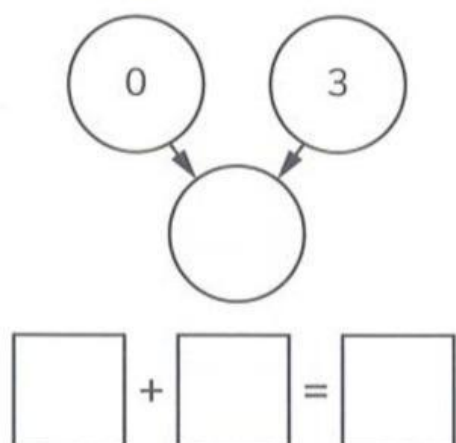
9<sup>th</sup>

seventh

10<sup>th</sup>

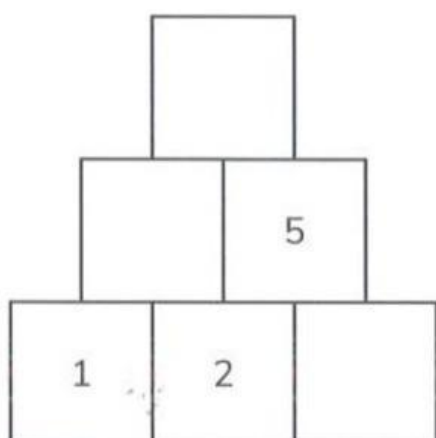
sixth

**Part 2. Complete the part-whole diagram. Write a number sentence for each diagram.**

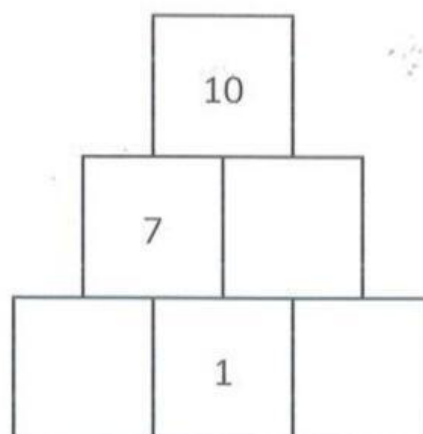


**Part 3.**

**Complete this addition wall.**






**Complete this subtraction wall.**






#### Part 4.

(a) Write the number sentence for this story.

First	Then	Now
		

--	--	--	--	--

(b) Write the number sentence for this story.

First	Then	Now
		

--	--	--	--	--

#### Part 5. Read and match.



on

next to

in

behind

in front of

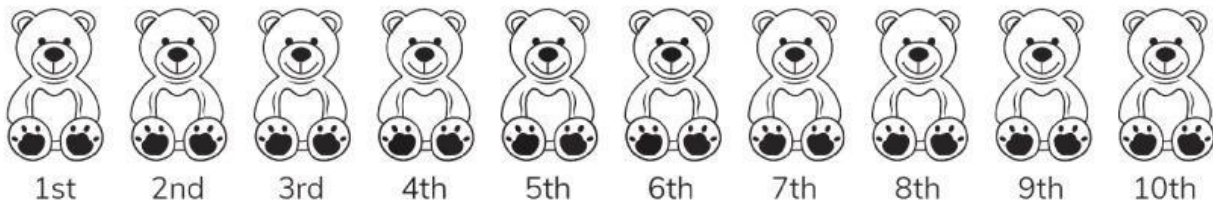


above

below

between

### Part 6. Read and follow the instructions.



- Draw a ring around the 1<sup>st</sup> and 5<sup>th</sup> bears.
- Cross out (x) the 3<sup>rd</sup> and 8<sup>th</sup> bears.
- Colour the 6<sup>th</sup> and 10<sup>th</sup> bears.
- Colour the bear to the left of the 3<sup>rd</sup> bear.

### Part 7. Write the ordinal number of the coloured object in each row.

## ORDINAL NUMBERS



1 <sup>st</sup>										2 <sup>nd</sup>
1 <sup>st</sup>										
1 <sup>st</sup>										
1 <sup>st</sup>										

**Part 8. Look at the Venn diagram and circle the correct answer.**



1. There are \_\_\_\_\_ things you wear on your feet.

3

4

5

2. There are \_\_\_\_\_ things you do not wear on your feet.

3

4

5

3. There are \_\_\_\_\_ items inside the circle than there are outside the circle.

the same

fewer

more

**Part 9. Write the times these clocks show.**

half past

o'clock





**Part 10. Write the correct day in each empty space.**

Monday Tuesday Wednesday Thursday Friday Saturday Sunday

Sunday	Monday	
--------	--------	--

	Tuesday	Wednesday
--	---------	-----------

Thursday		Saturday
----------	--	----------

	Friday	Saturday
--	--------	----------

**Part 11. Choose the right clock to match the times.**



Half past 10



4 o'clock



7 o'clock



Half past 1



\_\_\_ THE END \_\_\_