

Atividade de Revisão
3º ano

1. Find the months of the year



January	February
March	April
May	June
July	August
September	October
November	December

2. Order the months according to the right sequence



November	August	1) <input type="text"/>	7) <input type="text"/>
May	October	2) <input type="text"/>	8) <input type="text"/>
September	February	3) <input type="text"/>	9) <input type="text"/>
July	December	4) <input type="text"/>	10) <input type="text"/>
March	April	5) <input type="text"/>	11) <input type="text"/>
January	June	6) <input type="text"/>	12) <input type="text"/>

3. Answer the questions about months of the year and days of the week

- | | |
|---|--|
| 1. What day is before Friday?
_____ | 1. In _____ we celebrate Halloween. |
| 2. What day is two days after Sunday?
_____ | 2. In _____ we celebrate Father's day. |
| 3. What day is three days before Saturday?
_____ | 3. _____ sometimes has 29 days. |
| 4. What day is after Tuesday?
_____ | 4. In _____ we celebrate Women's day. |
| 5. What day of the week is Mothers' day?
_____ | 5. In _____ we celebrate Christmas. |
| | 6. In _____ we celebrate Thanksgiving. |



4. Choose the right clock

Which clock shows two o'clock?



(A) (B)

Which clock shows six o'clock?



(A) (B)

Which clock shows five o'clock?



(A) (B)

Which clock shows one o'clock?



(A) (B)

Which clock shows eight o'clock?

(A) (B)

Which clock shows eleven o'clock?

(A) (B)



Which clock shows three o'clock?

(A) (B)

<https://whatistheurl.com>

Which clock shows five o'clock?

(A) (B)

5. Read and write

02:00

two o'clock

:

five o'clock

:

ten o'clock

:

eight o'clock

:

twelve o'clock

:

three o'clock

:

nine o'clock

:

seven o'clock

:

one o'clock

:

four o'clock

:

eleven o'clock

:

six o'clock

6. Choose the correct spelling

11

12

13

14

15

eleven

twevle

thirten

fourteen

fifteen

elveen

twelve

tirteen

fuorteen

fifteen

eleveen

flewlvle

thirteen

fourten

feften

16

17

18

19

20

sixteen

seventen

eigtheen

nineteen

twetny

sixten

sventen

eihgteen

ninten

twentie

sixetn

seventeen

eighteen

ninteenn

twenty

7. Write the results

A) $11 + 8 = 19$ nineteen

B) $15 + 5 =$ _____

C) $20 - 10 =$ _____

D) $7 + 7 =$ _____

E) $18 - 6 =$ _____

F) $12 - 4 =$ _____

G) $9 + 6 =$ _____

1 ONE	11 ELEVEN
2 TWO	12 TWELVE
3 THREE	13 THIRTEEN
4 FOUR	14 FOURTEEN
5 FIVE	15 FIFTEEN
6 SIX	16 SIXTEEN
7 SEVEN	17 SEVENTEEN
8 EIGHT	18 EIGHTEEN
9 NINE	19 NINETEEN
10 TEN	20 TWENTY

8. Complete the table



brush

eat

read

jump

sing

swim

play

write

drink

9. Match the actions



Ride a bike

Go to bed

Eat pizza

Swim

Read a book