


K.NBT.A.1


Name: _____

Chilly Teen Numbers


Look at the ten frame and complete the statement.




12 is one group of 10 and ____ more.




15 is one group of 10 and ____ more.




17 is one group of 10 and ____ more.




11 is one group of 10 and ____ more.




13 is one group of 10 and ____ more.



19 is one group of 10 and ____ more.



18 is one group of 10 and ____ more.



14 is one group of 10 and ____ more.