


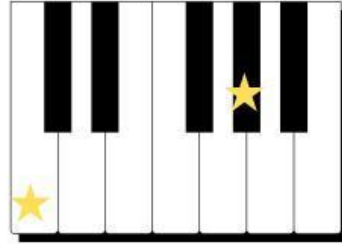
Major & Minor Interval 6th

Because the counting of Whole Step and Half step is getting difficult in this interval,
let's count everything by **Half step or Semitone**

Major 6th = 9 Half Step (9 Semitone)




Minor 6th = 8 Semitone




Major & Minor Interval 7th

Because the counting of Whole Step and Half step is getting difficult in this interval,
let's count everything by **Half step or Semitone**

Major 7th = 11 Half Step (9 Semitone)



Minor 7th = 10 Semitone



Identify the interval!

if Major, write **M6** or **M7**

If minor, write **m6** or **m7**

