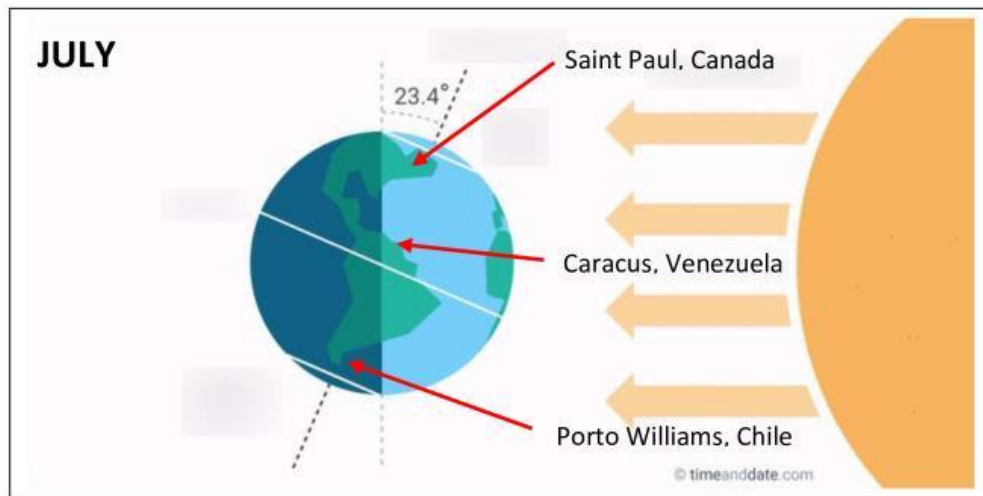


HASS Unit 1 People and the Environment

Climate Zones



In July, summer is the

Why

The Northern Hemisphere is tilted _____ the sun.

Which town on the map has the longest day?

Which town on the map has the shortest day?

Which town on the map is hot all year round?

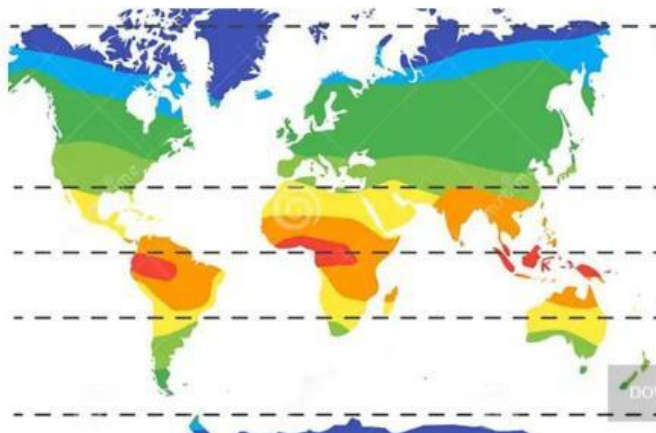
Which town on the map is very cold in July but warm in December?

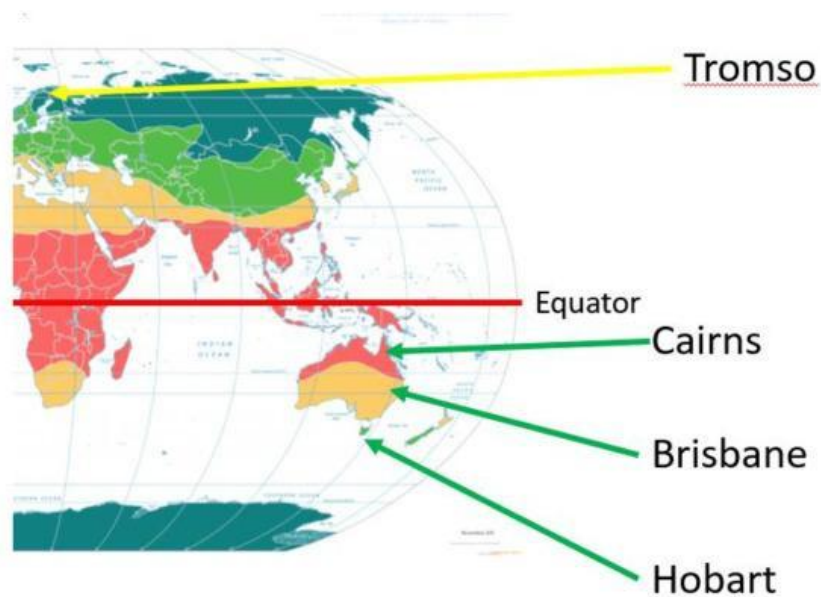
Which town on the map is occasional hot in July but very cold in December?

If I wanted to see snow, which town would I go to in June?

If I wanted to see snow, which town would I go to in January?

CLIMATE ZONES





Legend



This place has a long, cold winter and a short warm summer with occasional hot days. It is cool to cold for the rest of the year?

This place is hot all year round.

This place has four distinct seasons. It is cold in winter and has warm summers with the occasional very hot days.

This place is hot in summer and can get cold in winter. It is hot to warm for much of the year.

Which place is best for farming?

Which place is best for water sports?

Which place would be best for someone who likes outdoor activities, doesn't like very hot or very cold weather?