




























Calendar & Weather

Name: _____

I. Look at the calendar. Then, answer the questions.

Sun	Mon	Tues	Wed	Thurs	Fri	Sat
	 1	 2	 3	 4	 5	 6
 7	 8	 9	 10	 11	 12	 13
 14	 15	 16	 17	 18	 19	 20
 21	 22	 23	 24	 25	 26	 27

- How many days were stormy?
_____.
- How many days were sunny?
_____.
- How many days were foggy?
_____.
- What type of weather was on the 5th day?
_____.
- What type of weather was on the 21st day?
_____.



6. What type of weather was on the 10th day?

_____.

7. What type of weather was on the 23rd day?

_____.

8. What type of weather was on the 19th day?

_____.

9. What type of weather occurred the most?

_____.

10. What type of weather occurred the least?

_____.

