






Global English School

Centimeter and Meter

Grade 1

1. Measure short length using **centimeters**.
2. Measure distances and longer length using **meters**.

Choose the correct unit to measure each object below.

Object	Choose the unit
	<i>Meters</i> <i>Centimeters</i>
	<i>Meters</i> <i>Centimeters</i>
	<i>Meters</i> <i>Centimeters</i>
	<i>Meters</i> <i>Centimeters</i>
	<i>Meters</i> <i>Centimeters</i>