

# FAMILY AND FRIENDS

## I. Circle the odd-one-out. (Khoanh tròn từ mang nghĩa khác loại).

- |                   |              |            |                |
|-------------------|--------------|------------|----------------|
| 1. A. socks       | B. shorts    | C. kitchen | D. coat        |
| 2. A. sheep       | B. dress     | C. T-shirt | D. pants       |
| 3. A. fish        | B. shoes     | C. lion    | D. goat        |
| 4. A. living room | B. hat       | C. bedroom | D. bathroom    |
| 5. A. house       | B. apartment | C. chair   | D. dining room |

## II. Count and write. (Đếm và viết ) (1 điểm)

1. seven + eight = \_\_\_\_\_
2. eighteen – six = \_\_\_\_\_
3. Seventeen + three = \_\_\_\_\_
4. Eight + Eight = \_\_\_\_\_
5. Three + ten = \_\_\_\_\_
6. Twenty – five = \_\_\_\_\_
7. Eight + Ten = \_\_\_\_\_
8. Twelve – six = \_\_\_\_\_
9. Eleven + seven = \_\_\_\_\_
10. Fourteen – Nine = \_\_\_\_\_

**III. Write the word. (Viết từ.) (1 điểm)**

1. \_\_\_\_\_ ( c l e r i c ) hình tròn
2. \_\_\_\_\_ ( o a c t ) áo khoác
3. \_\_\_\_\_ ( g p i ) con heo
4. \_\_\_\_\_ ( t g r e i ) con cọp
5. \_\_\_\_\_ ( b r z e a ) con ngựa vằn
6. \_\_\_\_\_ ( r f e f a g i ) con hươu cao cổ
7. \_\_\_\_\_ ( o s e u h ) căn nhà
8. \_\_\_\_\_ ( l o n i ) con sư tử

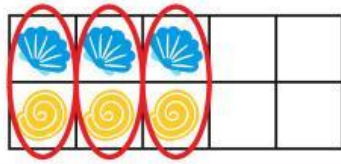
### I. Choose the correct answer

1. Where \_\_\_\_\_ the bag? - It's on the table.  
A. is B. are
2. \_\_\_\_\_ these her shoes? - No, they aren't  
A. Is B. Are
3. My brother \_\_\_\_\_ happy  
A. is B. are
4. How \_\_\_\_\_ you? - I'm very well. Thanks  
A. is B. are
5. They \_\_\_\_\_ on the bed.  
A. is B. are

# MATHEMATICS

Even numbers can be paired up.

$3+3$


☐

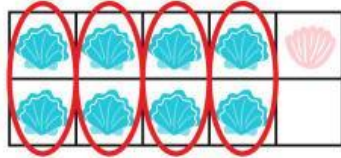
Odd

☒

Even

Odd numbers have 1 number leftover from the pairs.

$8+1$


☒

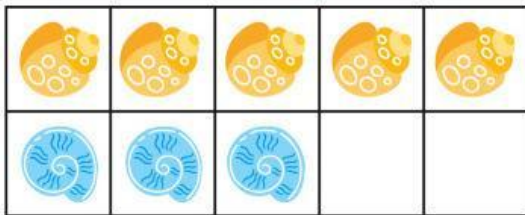
Odd

☐

Even

Is the sum even or odd? Check the correct answer.

$5+3$


☐

Odd

☐

Even

$6+1$

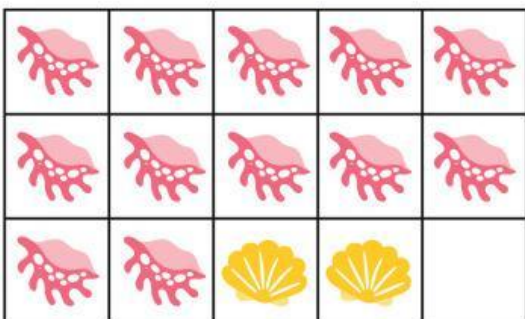

☐

Odd

☐

Even

$12+2$

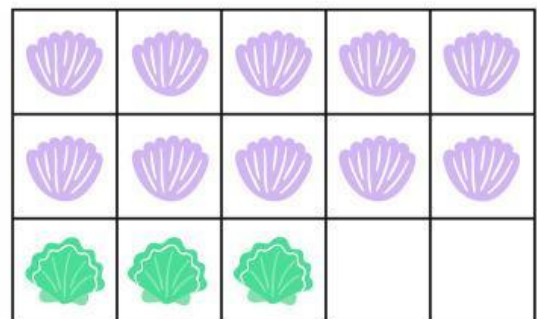

☐

Odd

☐

Even

$10+3$


☐


Odd

☐

Even




Count the objects and tell whether there is an odd or even number of objects



How many sheep? \_\_\_\_\_

Odd or even? \_\_\_\_\_




How many bananas? \_\_\_\_\_

Odd or even? \_\_\_\_\_



How many babies? \_\_\_\_\_

Odd or even? \_\_\_\_\_



How many cats? \_\_\_\_\_

Odd or even? \_\_\_\_\_



How many frogs? \_\_\_\_\_

Odd or even? \_\_\_\_\_

1. 114 birds were sitting in a tree. 21 more birds flew up to the tree. How many birds were there altogether in the tree?
  
2. 29 birds were sitting in a tree. Some more fly up to the tree. Then there were 142 birds in the tree. How many more flew up to the tree?
  
3. Beth has 74 crayons. She gives 25 of them away to Jen. How many crayons does Beth have left?



## SCIENCE

### I. Choose the correct answer:

1. To stay safe, you should \_\_\_\_\_ when using electricity.

A. eat

B. take care

C. wash your hands

2. Mains electricity can be \_\_\_\_\_

A. dangerous

B. pink

C. happy

3. Never use a \_\_\_\_\_ wire

A. damaged

B. blue

C. long

## II. True or false:

1. Never put anything other than a plug into a wall socket.

A. True

B. False

2. You should use electricity near water.

A. True

B. False