	UNIT ASSESMENT SCIENCE ACADEMIC YEAR 2021/2022	
	Subject : Science	Name :
	Primary : 2	Day/ Date :

SECTION A

Read this story and answer the question number 1 – 4

Max is a 2nd grade student. He wants to observe the things/objects around him. There a lot of shape that max can observe in his living room as the picture below



- What is one object that Max can find in his living room?
 - bathtub
 - clock
 - stove.
- From picture above, please write three kinds of shape.

- Max tell his sister that the carpet is square. Do you agree with Max? Please thich your answer.

☐


Agree

☐






Disagree

Why do you agree/ disagree? Explain your answer.

4. Please draw three objects in your bedroom and also write their shape.



5. Look at these pictures and what do we do to change their shape. Please write in the box

Before	After	What is done?
		
		
		
		

6. Please match these pictures and write are they cooling or heating

