



Name: _____



Date: _____

Score: _____



Find Total Value




Count the value of all coins. Write the value of each coin and the total amount.

1)  +  +  = Total _____
_____ ¢ _____ ¢ _____ ¢

2)  +  = Total _____
_____ ¢ _____ ¢

3)  +  +  = Total _____
_____ ¢ _____ ¢ _____ ¢

4)  +  = Total _____
_____ ¢ _____ ¢

5)  +  +  = Total _____
_____ ¢ _____ ¢ _____ ¢

6)  +  +  +  = Total _____
_____ ¢ _____ ¢ _____ ¢ _____ ¢

7)  +  = Total _____
_____ ¢ _____ ¢