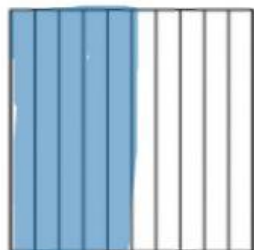


Name: \_\_\_\_\_

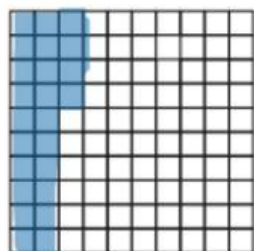
Worksheet (C)  
Decimal and fractions

Match the model with its decimal



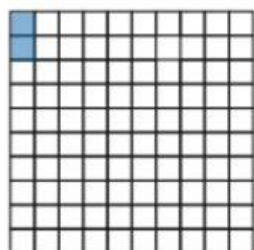
$$\frac{5}{10}$$

0.02



$$\frac{24}{100}$$

0.20



$$\frac{2}{100}$$

0.24

0.5