

## Effect of geosphere – Work sheet

### Level – 1(Basic)

**Match the landforms:**

**1. Mountains**



**2. Volcanoes**



**3. Forest Soil**



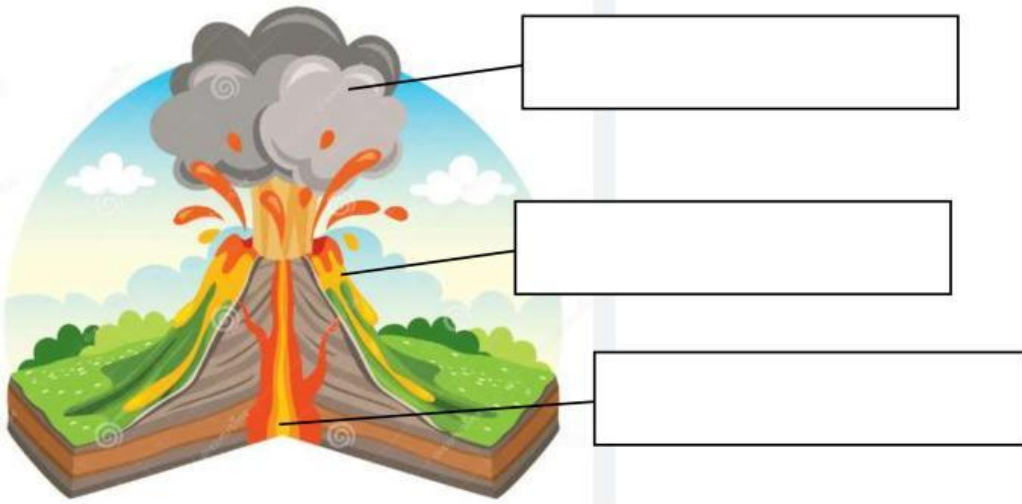
**4. Desert soil**



**5. Grass land soil**



2. Label magma and lava, ash cloud in the picture.



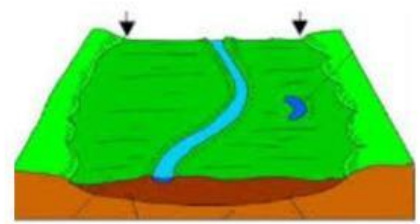
**Topic: Effects of the hydrosphere**

Match the following systems with its name:

A. Hydrosphere	 <p>All land or solid and molten rocks</p>
B. Geosphere	 <p>Entire water (solid, liquid and gas) on earth</p>
C. Atmosphere	 <p>Entire gas on Earth.</p>

3. Name the landforms in the diagram.

[ delta, flood plain, alluvial fan ]

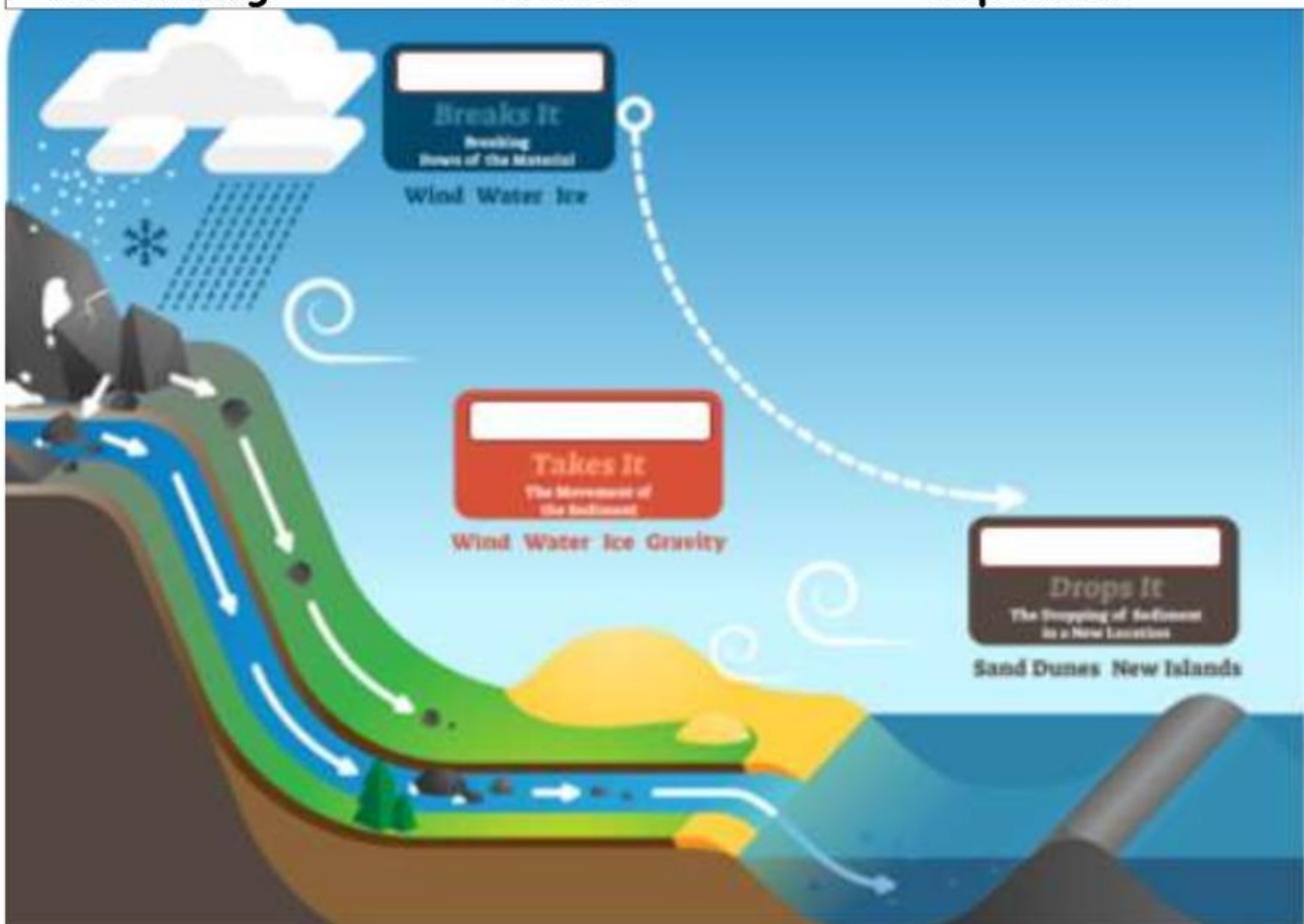


4. use the words in the box to label the diagram below.

Weathering

erosion

deposition



6. Write where does the below phenomenon occurs?  
(on shore/ above ocean)



a. Hurricane: .....



b. Storm surges: .....

8. Name types of mountains.

[ volcanic mountain , folded mountain, fault-block mountains ]

