
















Name

Date



ADDITION SUBTRACTION PROBLEMS UP TO 100 SHEET 3B

Work out the answers to these addition and subtraction word problems.

		WORKING OUT
1)	<p>There were 86  walking on the ground.</p> <p>49  got squashed.</p> <p>How many  are left? _____</p>	
2)	<p>I have \$95.</p> <p>I spend \$43.</p> <p>How much do I have left? \$ _____</p>	
3)	<p>There are 45  in a pod.</p> <p>There are 38  in another pod.</p> <p>How many  are there in all? _____</p>	
4)	<p>There are 62  in a farmyard.</p> <p>29 more  come along.</p> <p>How many  are there in total? _____</p>	
5)	<p>A shop has 71 .</p> <p>It sells 58 .</p> <p>How many  does it have left? _____</p>	
6)	<p>There are 49  on one tree.</p> <p>There are 45  on another tree.</p> <p>How many  altogether on both trees? _____</p>	