



Name :

Class :




4.2

Molecular and Structural Formulas



Answer all the task questions

CHEMISTRY UNITS
KMPK



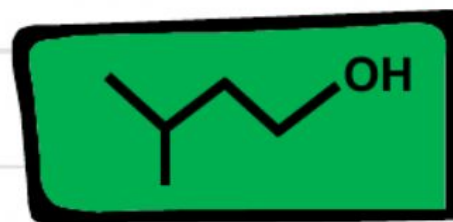

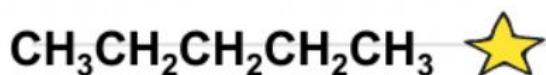
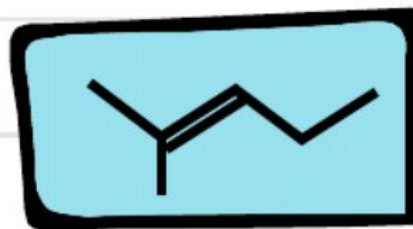
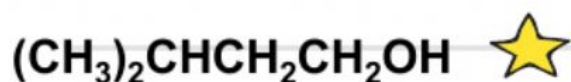
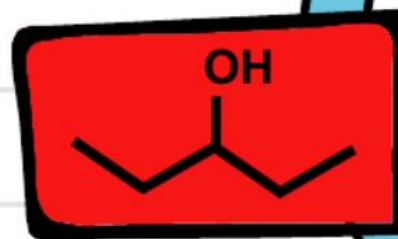
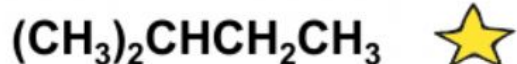


A

Match each condensed structure with its skeletal structure


Condensed structure

skeletal structure





Classify the labelled carbon (C) atoms as 1° , 2° , 3°



Classify the hydrogen (H) atoms present around each labeled atom as 1° , 2° , 3° & 4°

