



TVS Teacher Training Academy

Mathematics worksheet







Numbers

Name:

Date:

Class:

HOW MANY...?

 3 5 2	 7 5 9	 2 6 5
 5 3 1	 4 5 8	 6 5 9