

# Area of a Square

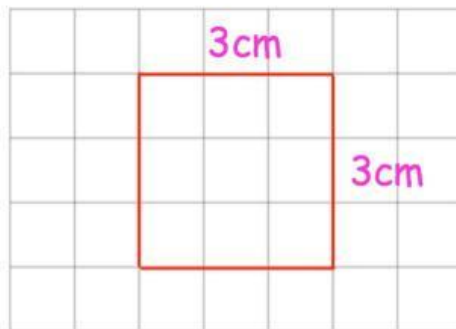
## Area of a Rectangle



### Tips

- Read each question carefully
- Attempt every question.
- Check your answers seem right.
- Always show your workings

1. Work out the area of this square



cm<sup>2</sup>

- 
2. Work out the area of this rectangle



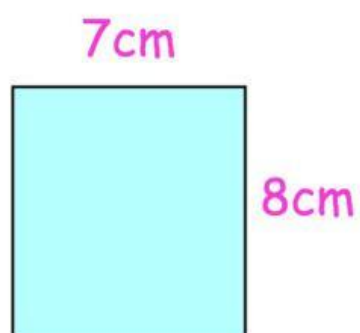
cm<sup>2</sup>

3. Work out the area of this rectangle



cm<sup>2</sup>

4. Work out the area of this rectangle



cm<sup>2</sup>

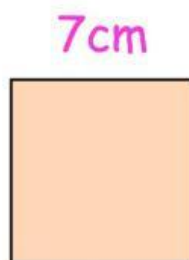
5. Work out the area of this rectangle



---


$\text{m}^2$
--------------

6. Work out the area of this square



$\text{cm}^2$
---------------

7. Work out the area of this rectangle



---

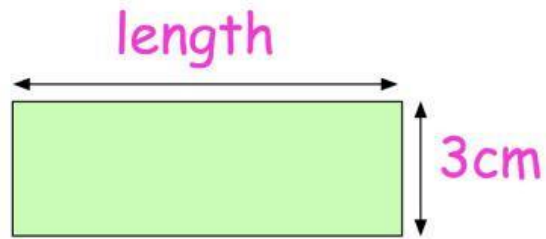
cm <sup>2</sup>
-----------------

8. Work out the area of this square



cm <sup>2</sup>
-----------------

9.



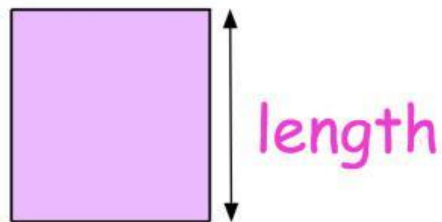
The area of this rectangle is  $27\text{cm}^2$

Work out the length of the rectangle

---

cm
----

10.



The area of this square is  $36\text{cm}^2$

Work out the length of each side of the square

cm
----