

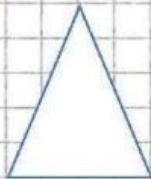
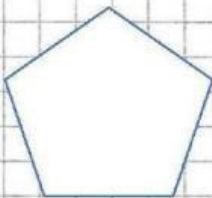

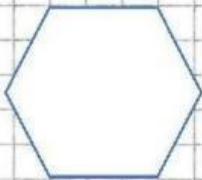
SCRIVI IL TUO NOME _____

TERMINI DELLA DIVISIONE

$$262 : 2 = 131$$

POLIGONI

COLLEGA IL POLIGONO AL SUO NOME



QUADRILATERO

ESAGONO

TRIANGOLO

PENTAGONO