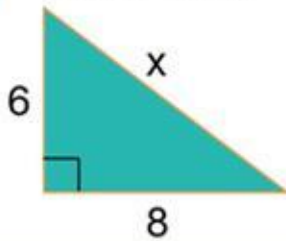


Name: _____ Grade: 8A1

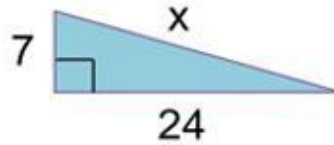
Warm up:

Solve for x.

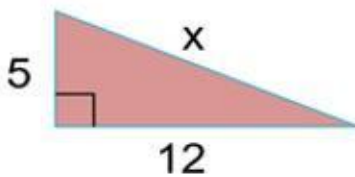
1 Solve for x.



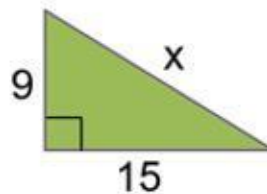
2 Solve for x.



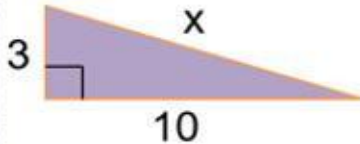
3 Solve for x.



4 Solve for x.
(Round to the nearest tenths place.)



5 Solve for x.
(Round to the nearest tenths place.)



6 Solve for x.

