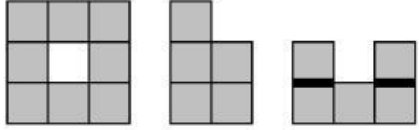



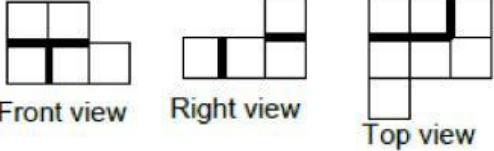
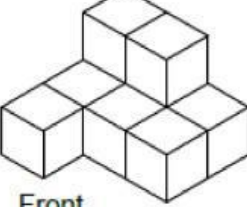


1. Which pair below show same shape?

A.	 <p>Front view Right view Top view</p>	 <p>Front</p>
B.	 <p>Front view Left view Top view</p>	 <p>Front</p>
C.	 <p>Front view Right view Top view</p>	 <p>Front</p>

2. Drag and drop in appropriate cell

Provides a 2D view	It include depth.	shows only one side of the object	Provides a 3D view	Does not preserve depth.	displays at least three sides
--------------------	-------------------	-----------------------------------	--------------------	--------------------------	-------------------------------

Orthographic face view	Isometric drawing