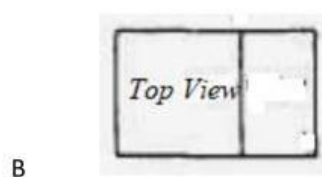
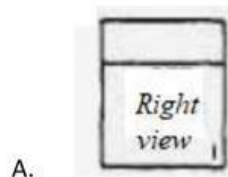
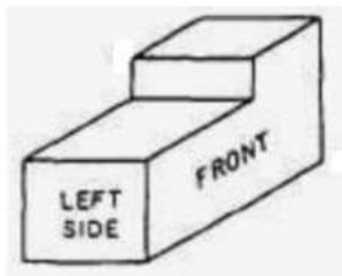


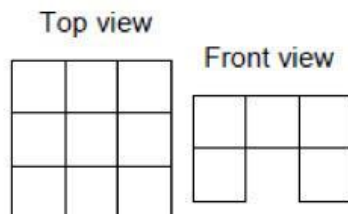
1. An orthographic drawing is

- A. 3D view of 3D structure
- B. 3D view of 2D shape
- C. 2D view of 3D structure
- D. 2D view of 2D shape

2. Which orthographic drawing below is the front face of the structure below



3. Which structure below is shown by the drawing aside



A



B



C