






Sonam sold following fruits in a day. Determine the number of fruits sold in a day

Fruits	Fruits sold
Apple	
Banana	
Watermelon	

Scale:  = 10 Fruits  = 5 Fruits

Draw a pictogram to represent the number of dogs that belong to four families.

Family	Number of dogs
Family 1	4
Family 2	6
Family 3	8
Family 4	2