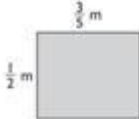

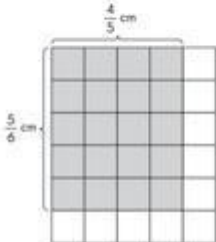
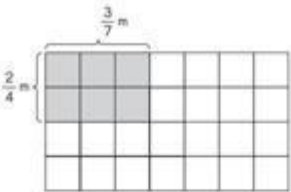
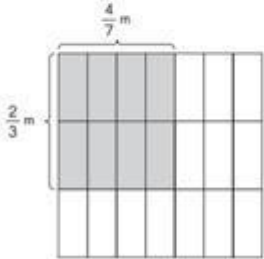


Find the area of each shaded rectangle.

<p>1.</p> 	$\frac{6}{28}$ square m
<p>2.</p> 	$\frac{8}{21}$ square meter
<p>3.</p> 	$\frac{3}{10}$ square m
<p>4.</p> 	$\frac{20}{30}$ square cm
<p>5. A 1-meter square plot of land is covered by a rectangular patch of grass that measures <math>\frac{4}{7}</math> meter by <math>\frac{2}{3}</math> meter. What is the area of the patch of grass?</p> 	$\frac{3}{32}$ square ft