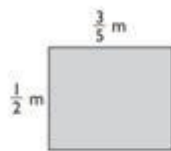


Find the area of each shaded rectangle.

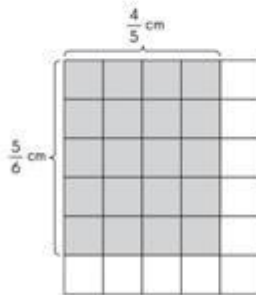
1.



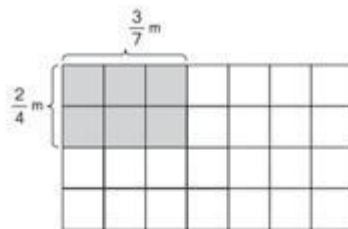
2.



3.



4.



5.

A 1-meter square plot of land is covered by a rectangular patch of grass that measures $\frac{4}{7}$ meter by $\frac{2}{3}$ meter. What is the area of the patch of grass?

