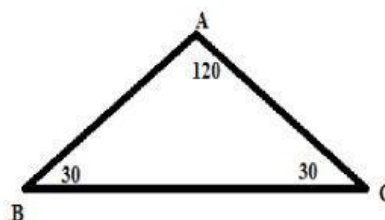


### Worksheet 1: Describing relationships

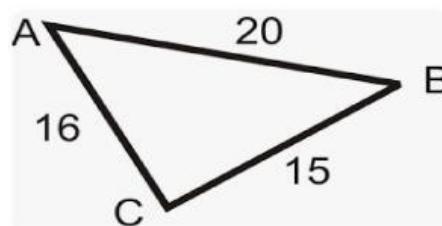
1. Which is the longest side of this triangle?

- a. Side AB
- b. Side BC
- c. Side AC



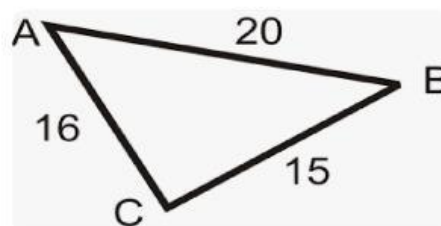
2. Which is the smallest angle in this triangle?

- a. Angle A
- b. Angle B
- c. Angle C



3. Which is the largest angle in this triangle?

- a. Angle A
- b. Angle B
- c. Angle C



3. Find the shortest and longest side in this triangle?

- a. Shortest side =
- b. Longest side =

