

Complete the following questions.

1) Match the numbers to the Roman numeral.

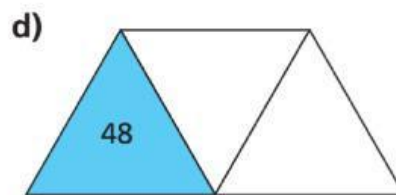
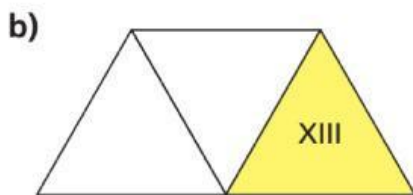
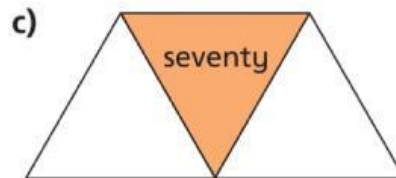
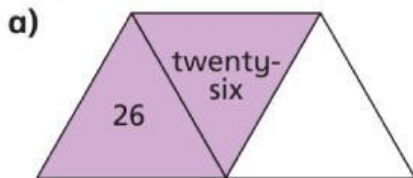
1	5	10	50	100
---	---	----	----	-----

L	C	V	X	I
---	---	---	---	---

2) Write each number in Roman numerals.

a) 7    b) 12    c) 23    d) 55    e) 72

3) Each diagram should show a number in numerals, words and Roman numerals. Complete the diagrams.



4) Complete the function machine

