



Subtraction

Directions: Take away a part from the whole. Write the answer in the box provided.


1. $5 - 3 =$ _____



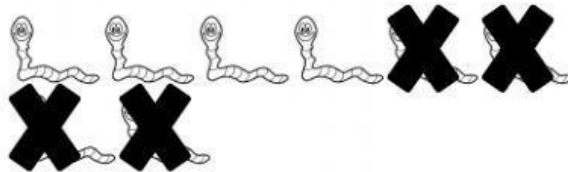
2. $10 - 6 =$ _____



3. $6 - 1 =$ _____




4. $8 - 4 =$ _____




5. $3 - 2 =$ _____



6. $7 - 7 =$ _____



7. $9 - 0 =$ _____



8. $2 - 1 =$ _____

