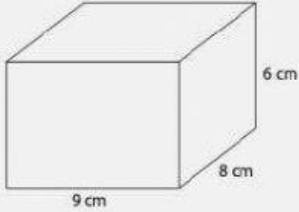


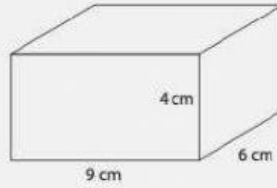
Hitunglah volume nya

Name: _____ Class: _____

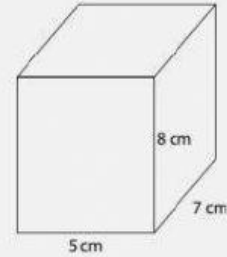
Hitunglah Volume masing-masing bangun di bawah ini !



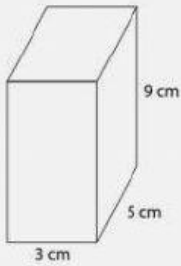
Volume: cm^3



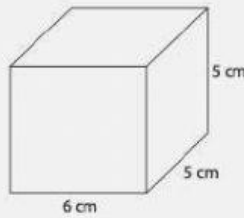
Volume: cm^3



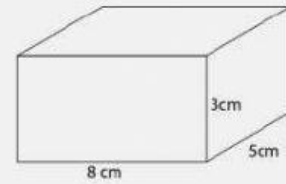
Volume: cm^3



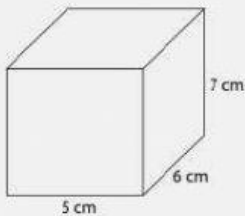
Volume: cm^3



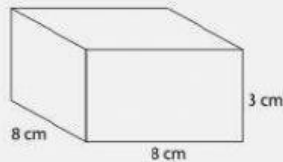
Volume: cm^3



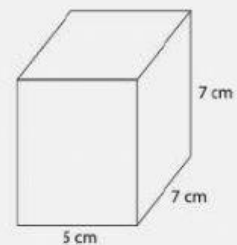
Volume: cm^3



Volume: cm^3



Volume: cm^3



Volume: cm^3