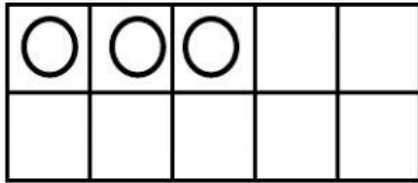


Name _____

FIND THE MISSING NUMBER

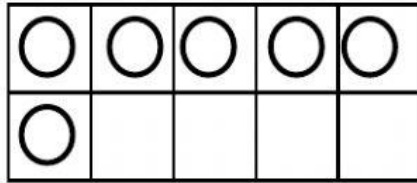
Directions: Write the missing number in the box.

1.



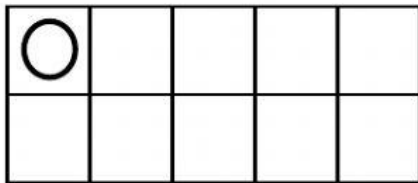
$$3 + \underline{\quad} = 10$$

2.



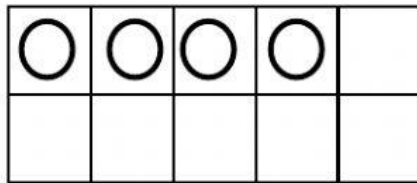
$$6 + \underline{\quad} = 10$$

3.



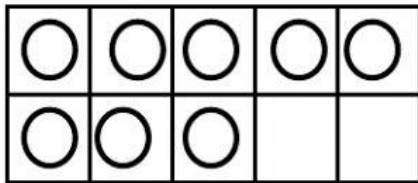
$$1 + \underline{\quad} = 10$$

4.



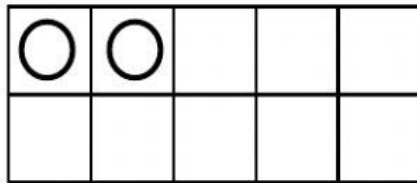
$$4 + \underline{\quad} = 10$$

5.



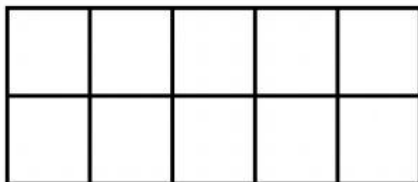
$$8 + \underline{\quad} = 10$$

6.



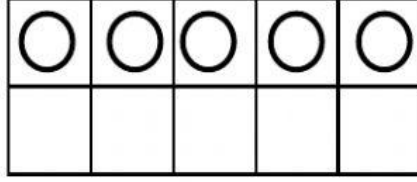
$$2 + \underline{\quad} = 10$$

7.



$$0 + \underline{\quad} = 10$$

8.



$$5 + \underline{\quad} = 10$$