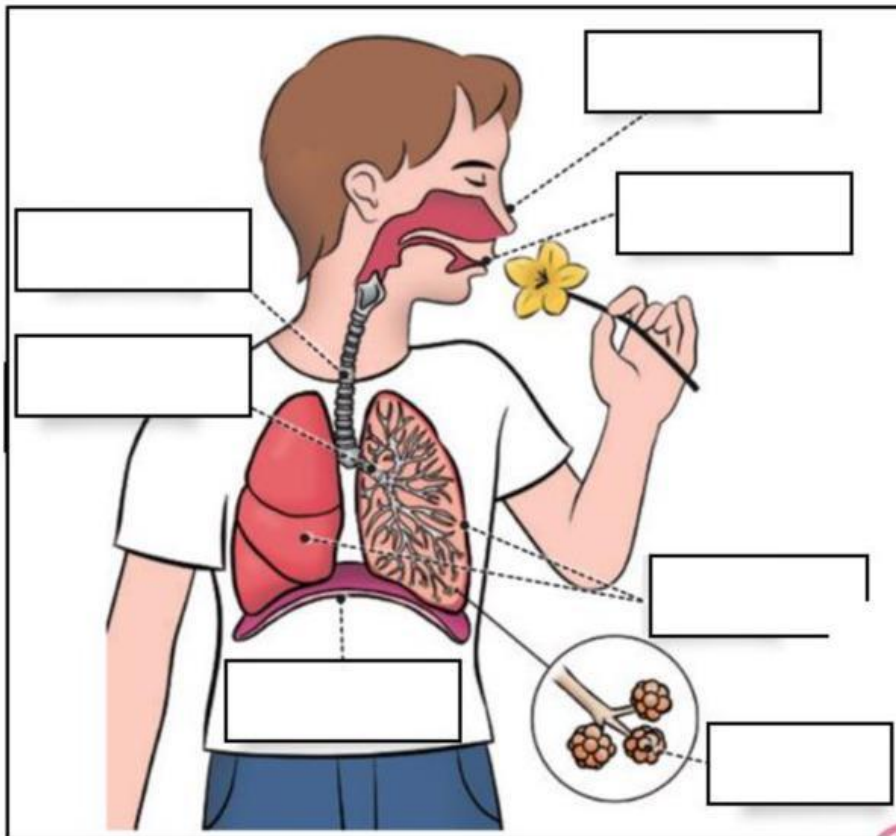




1. What are the 3 life functions?

_____, _____, and _____.

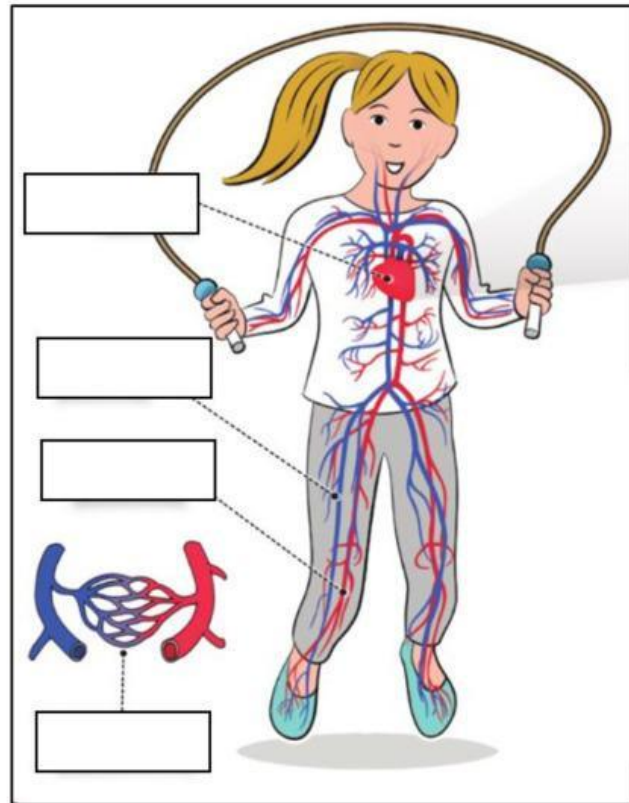
2. Write the name of the parts of the respiratory system.



3. Fill the gaps of the digestive system.

1. We breath in _____ through our _____ and _____.
2. The air travels down the _____ and _____. They take air into our _____.
3. The air inside the lungs goes to the _____.
4. The alveoli transfer oxygen to the _____.
5. Finally, we breath out the _____.

4. Write the names of the circulatory system.



5. Choose the correct option of the circulatory system.

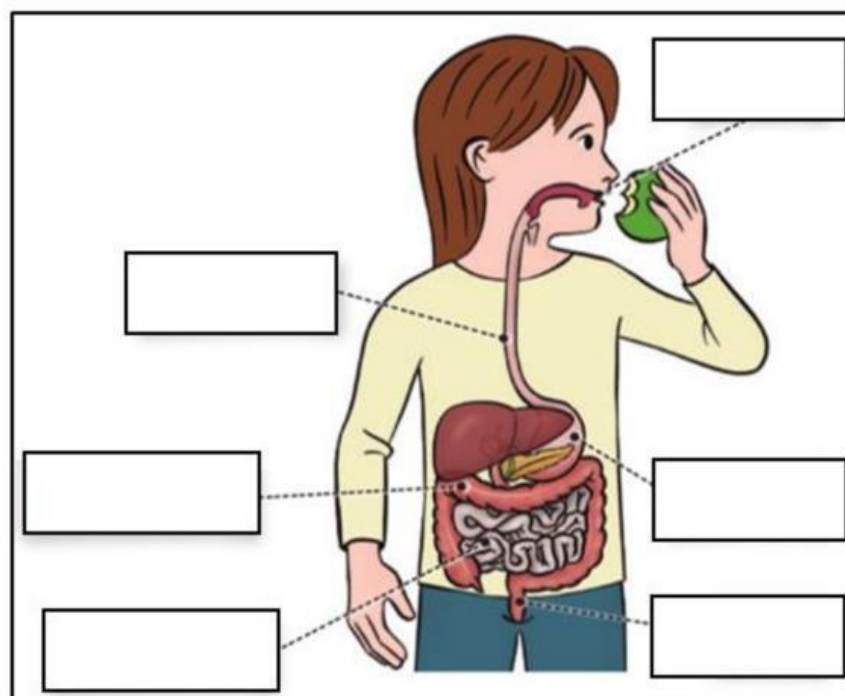
Heart

Arteries

Veins

Capillaries

6. Write the names of the digestive system.



7. Order the process of the digestive system.

☐

The small intestine **separates the nutrients from the waste**.

☐

The **waste passes into the large intestine** and leaves our body through the **anus**.

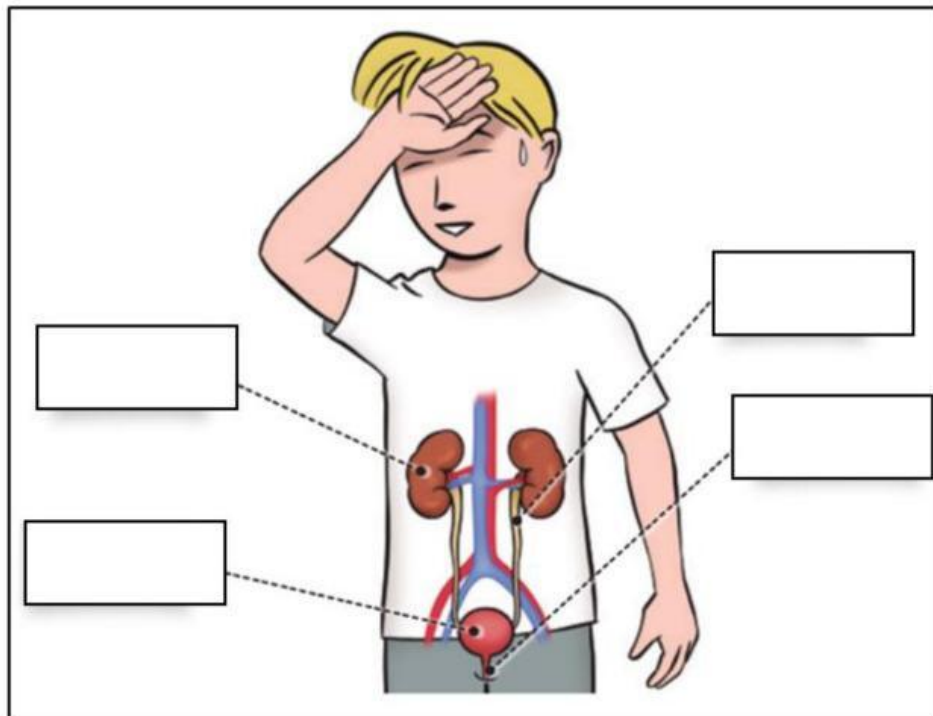
☐

Food travels down the **oesophagus** into our **stomach** and into the **small intestine**.

☐

Digestion starts when we eat food through our **mouth**.

8. Write the names of the excretory system.



9. Choose: True or False.

1. Our ureters make urine. **True** / **False**
2. Urine is made by separating the waste and water from blood. **True** / **False**
3. Kidneys carry the urine to the bladder. **True** / **False**
4. Urine leaves the bladder through the urethra. **True** / **False**
5. Our body also eliminates waste through our skin with sweat. **True** / **False**

10. Read and match.

Respiratory
system

Circulatory
system

Digestive
system

Excretory
system

Eliminates
waste from our
body.

Help us our
body to absorb
nutrients.

Transports
oxygen and
nutrients.

Help us to
breathe.

