

Name: _____

Date: _____

1

Find the answer of the following additions with regrouping. 2% each one

$$\begin{array}{r} 126 \\ + 246 \\ \hline \end{array}$$

422

$$\begin{array}{r} 295 \\ + 127 \\ \hline \end{array}$$

812

$$\begin{array}{r} 449 \\ + 363 \\ \hline \end{array}$$

372

2

Find the answer of the following subtraction with regrouping. 4% each one

$$\begin{array}{r} 792 \\ - 373 \\ \hline \end{array}$$

52

$$\begin{array}{r} 563 \\ - 483 \\ \hline \end{array}$$

80

$$\begin{array}{r} 437 \\ - 385 \\ \hline \end{array}$$


419

$$\begin{array}{r} 455 \\ - 262 \\ \hline \end{array}$$


193

3


Match with the correct answer. 1% each one.



Isoceles Triangle



ScaleneTriangle



Equilateral Triangle