

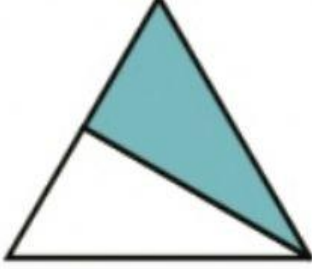

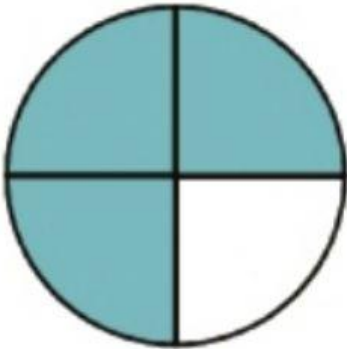
Name -

Class:- IV Subject:- Maths

రంగు వేయబడిన భాగం ఎంత?

(క్లిక్ చేయండి)

How much is the shaded part?

 $1/2$ $1/4$ $2/4$ $3/4$  $1/2$ $1/4$ $2/4$ $3/4$  $2/4$ $1/4$ $1/2$ $3/4$  $2/4$ $1/4$ $1/2$ $3/4$  $2/4$ $1/4$ $1/2$ $3/4$

పిల్లలూ.. 10/10 వచ్చాక మీ నోట్ బుక్ లో రాసుకోండి.

Designed by MAHESH MACHARLA.SGT.MPPS KOTHAPET O/C. JAGTIAL.