

Fun at the Fair

Name: _____

Marks : 10

Class : II

Date: _____

Find how much more money is needed to make up the amount

Example:




 +  +  + ₹30 \longrightarrow ₹ 100

1.  +  + ₹ \longrightarrow ₹ 80

2.  +  + ₹ \longrightarrow ₹ 50

3.  +  +  + ₹ \longrightarrow ₹ 70

4.  +  +  + ₹ \longrightarrow ₹ 60

5.  +  +  + ₹ \longrightarrow ₹ 25

6.  +  +  + ₹ \longrightarrow ₹ 100

7.  +  +  + ₹ \longrightarrow ₹ 10

8.  +  + ₹ \longrightarrow ₹ 20

9.  +  +  + ₹ \longrightarrow ₹ 50

10.  + ₹ \longrightarrow ₹ 25