

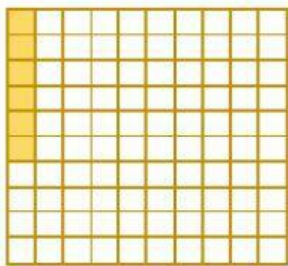
# CLASE DE LOS SUPERHEROES

## DECIMALES



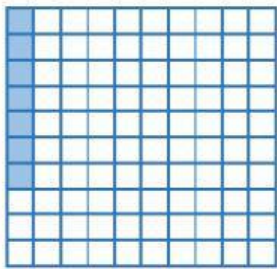
2. Escribe la parte coloreada en forma de fracción y en forma decimal.

EJEMPLO:




$$\frac{6}{10}$$

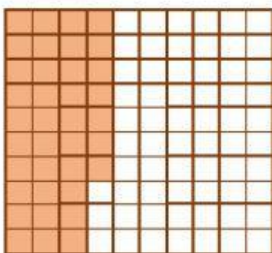
0,6



$$\frac{1}{10}$$



$$\frac{2}{10}$$

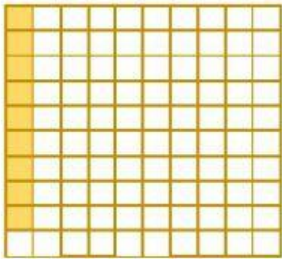


$$\frac{4}{10}$$




# CLASE DE LOS SUPERHEROES

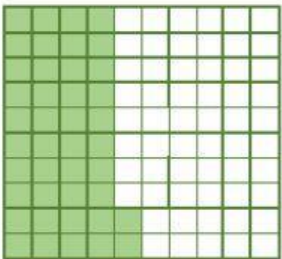
## DECIMALES



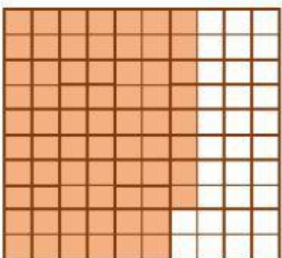
|  |  |
|--|--|
| <div style="border-bottom: 1px solid black; height: 40px; width: 50px;"></div> | <div style="border: 1px solid black; height: 40px; width: 100px;"></div> |
|--|--|



|  |  |
|--|--|
| <div style="border-bottom: 1px solid black; height: 40px; width: 50px;"></div> | <div style="border: 1px solid black; height: 40px; width: 100px;"></div> |
|--|--|



|  |  |
|--|--|
| <div style="border-bottom: 1px solid black; height: 40px; width: 50px;"></div> | <div style="border: 1px solid black; height: 40px; width: 100px;"></div> |
|--|--|



|  |  |
|--|--|
| <div style="border-bottom: 1px solid black; height: 40px; width: 50px;"></div> | <div style="border: 1px solid black; height: 40px; width: 100px;"></div> |
|--|--|