




CONFRONTO TRA FRAZIONI

FRAZIONI CON LO STESSA DENOMINATORE

ESERCIZIO

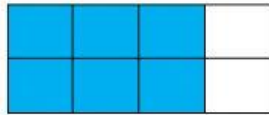
INSERISCI IL SEGNO > O <



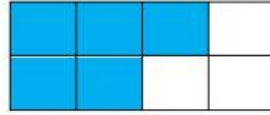
$$\frac{5}{9}$$




$$\frac{7}{9}$$




$$\frac{6}{8}$$



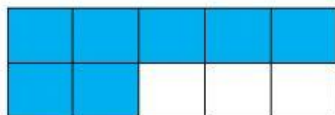
$$\frac{5}{8}$$



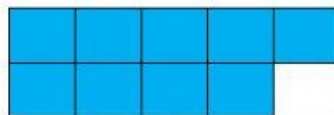
$$\frac{5}{6}$$



$$\frac{1}{6}$$



$$\frac{7}{10}$$



$$\frac{9}{10}$$

Frazioni con lo stesso denominatore

Se due frazioni hanno lo stesso denominatore allora è più grande la frazione con il numeratore più grande.

FRAZIONI CON LO STESSO NUMERATORE

ESERCIZIO

INSERISCI IL SEGNO $>$ O $<$

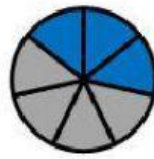


Frazioni con lo stesso numeratore

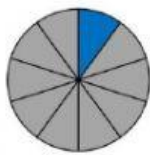
Se due frazioni hanno lo stesso numeratore allora è più grande la frazione con il denominatore più piccolo.



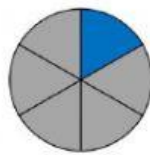
$$\frac{3}{5}$$



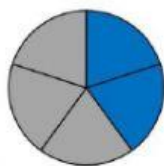
$$\frac{3}{7}$$



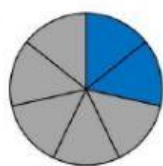
$$\frac{1}{10}$$



$$\frac{1}{6}$$



$$\frac{2}{5}$$



$$\frac{2}{7}$$