

Ordinal Numbers

first


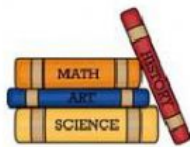





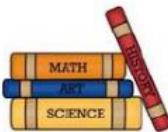

second



third

Drag and drop to show the position of each item listed.



1 st	2 nd	3 rd	4 th	5 th
-----------------	-----------------	-----------------	-----------------	-----------------

Answer the questions about the frogs using ordinal numbers.



1. The  is in the _____ spot.

2. The  is in the _____ spot.

3. The  is in the _____ spot.

4. The  is in the _____ spot.

5. The  is in the _____ spot.

