













## Unit 3, Lesson 6 and 7

### Boiling and Melting

**A. Instructions:** Tick all the objects that can melt.

**B. Instructions:** Choose the correct answer from the options to complete the description.

In boiling, the particles of liquid \_\_\_\_\_ energy, they move \_\_\_\_\_ and move \_\_\_\_\_ until they become gas particles.

In melting, the particles of solid \_\_\_\_\_ energy, they move \_\_\_\_\_ and move \_\_\_\_\_ until they become liquid particles.

In freezing, the particles of liquid \_\_\_\_\_ energy, they move \_\_\_\_\_ and move \_\_\_\_\_ until they become solid particles.