













WRITE THE TIME

Look at the clocks and write the time. Look at the example.

 <p>It's <u>half past one</u>.</p>	 <p>It's _____.</p>	 <p>It's _____.</p>
 <p>It's _____.</p>	 <p>It's _____.</p>	 <p>It's _____.</p>
 <p>It's _____.</p>	 <p>It's _____.</p>	 <p>It's _____.</p>
 <p>It's _____.</p>	 <p>It's _____.</p>	 <p>It's _____.</p>