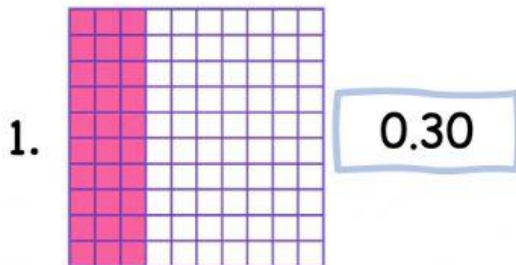


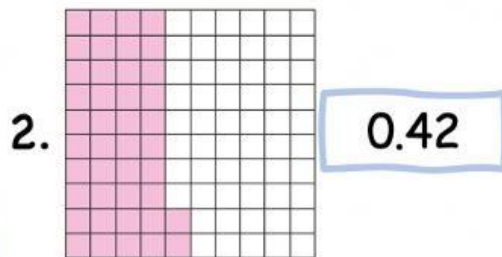
Name: \_\_\_\_\_

Worksheet (C)  
Model decimal and fractions

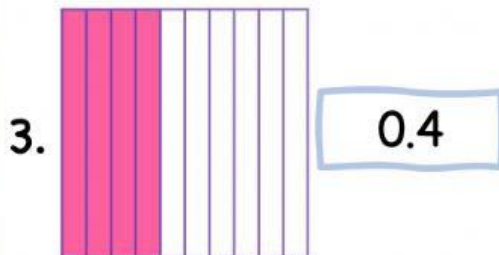
Match the model with its fraction.



$$\frac{4}{10}$$



$$\frac{30}{100}$$



$$\frac{42}{100}$$